









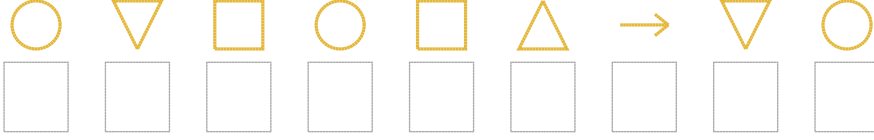


Şekil Sayı Eşleştirme

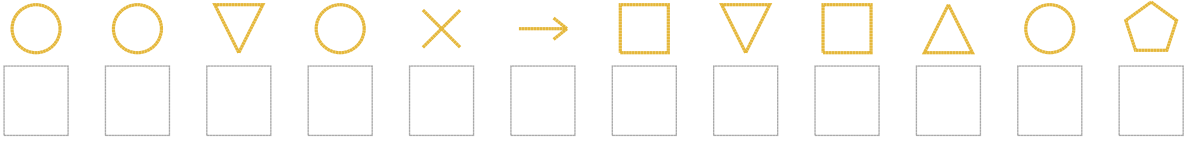
									
= 3	= 2	= 0	= 1	= 7	= 6	= 8	= 9	= 4	= 5

Aşağıdaki uzun şifreleri hatasız çözerek altlarına yazın:

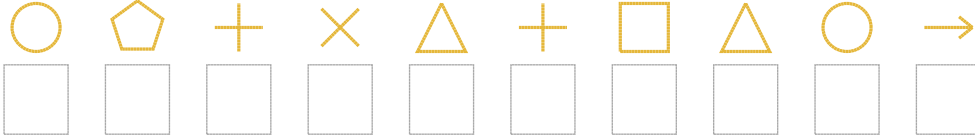
1. Şifre



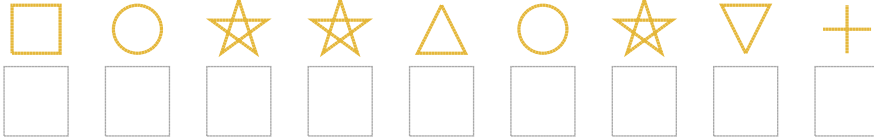
2. Şifre



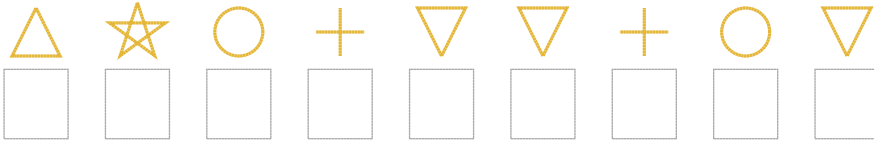
3. Şifre



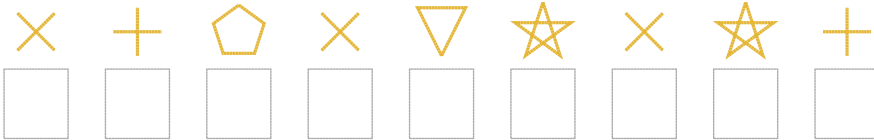
4. Şifre



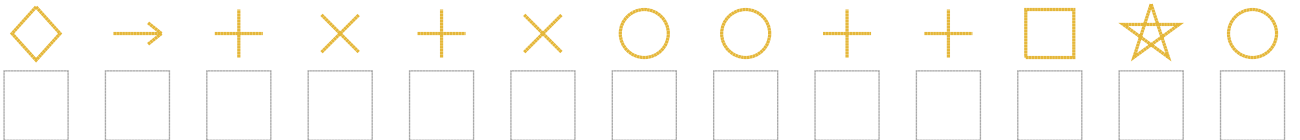
5. Şifre



6. Şifre



7. Şifre



❑ BONUS: 6. ve 3. şifrenin ikinci rakamının toplamı kaçtır?

Cevap Anahtarı

1. Şifre: 120104521
2. Şifre: 112185020417
3. Şifre: 1768460415
4. Şifre: 013341326
5. Şifre: 431622612
6. Şifre: 867823836
7. Şifre: 9568681166031

□ Bonus Soru Cevabı: 13